

# Chapter 6 Test

---



---



---

Draw a line to match the coin to its value.

1.



1¢



5¢



10¢

Count by 1s, by 5s, or by 10s. Circle the coins needed to make 20 cents.

2.



3.



4.



Write the total value as you *count on*.

5.



¢    ¢    ¢

6.



¢    ¢    ¢

7.



¢    ¢    ¢

8.





¢    ¢    ¢

© 2015 BJU Press. Unauthorized reproduction prohibited.

Write the number of dimes and pennies.  
Write the values. Complete the addition sentence.



9.

Tens	Ones
	

dimes     pennies

¢ +  ¢ =  ¢

10.


Tens	Ones
	


dimes     pennies


¢ +  ¢ =  ¢

Draw a line to match the set of coins to the item that costs that amount.

11.









 13¢


 33¢


 30¢


Write the total value.

12.   ¢

13.   ¢

14.   ¢

15.   ¢

16.   ¢