

Chapter 19 Test

Write the value of each coin.
 Draw a line to match each coin to its name.

1.

 ¢

 ¢


dime
 quarter
 penny
 nickel


 ¢

 ¢

Write the total value as you *count on*.
 Do you have enough money to buy the item? Circle *yes* or *no*.

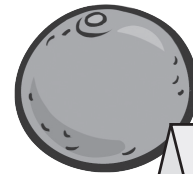
2.


 ¢

 ¢

 ¢

 ¢

 ¢


yes
 no

37¢

3.


 ¢

 ¢

 ¢

 ¢


yes
 no

18¢


4.


 ¢

 ¢

 ¢

 ¢

 ¢


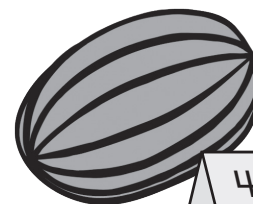
yes
 no

35¢

5.


 ¢


 ¢

 ¢


yes
 no

42¢


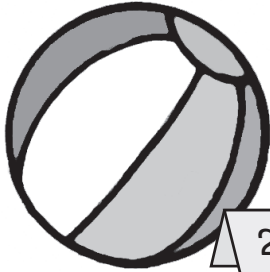
Circle the coins needed to buy each item.

6. 

 20¢

7. 

 45¢

8. 

 27¢

9. 

 43¢

Draw coins to picture the story.
 Complete the sentences.

10. Brody had 50 cents. He used 2 dimes to buy a ball. How much money does Brody have left?

Brody has cents left. ¢ ¢ ¢

11. Lindsey had 40 cents in her piggy bank. Her mom gave her 3 pennies. How much money does Lindsey have now?

Lindsey has cents. ¢ ¢ ¢