


Write the value of the set of money.



Cross out the exact bills and coins needed for the amount shown.



Write $>$, $<$, or $=$ to compare.


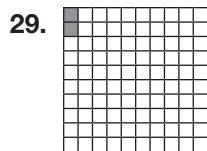
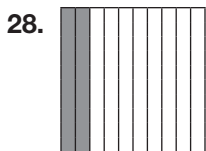
24. $40,000 + 5,000 + 600 + 70 + 3$ \bigcirc $45,673$

25. $800 + 20 + 9$ \bigcirc $3,126,591$

26. $20,000 + 2,000 + 300 + 80 + 5$ \bigcirc $21,385$

27. $60,000 + 300 + 10 + 7$ \bigcirc $63,117$

Write the decimal.



Write the number in *standard form*.

30. five tenths _____

31. eighteen hundredths _____

32. six hundredths _____